

Write your name here

Surname

Other names

**Pearson Edexcel**  
**International**  
**Advanced Level**

Centre Number

--	--	--	--	--	--

Candidate Number

--	--	--	--	--	--

# Geography

**International Advanced Subsidiary**  
**Paper 1: Global Challenges**

Tuesday 15 May 2018 – Afternoon

**Time: 1 hour 45 minutes**

Paper Reference

**WGE01/01**

**You must have:**

Resource Booklet (enclosed)

Total Marks

--

## Instructions

- Use **black** ink or ball-point pen.
- **Fill in the boxes** at the top of this page with your name, centre number and candidate number.
- Answer **all** questions in Section A. Answer **either** Question 5 **or** Question 6 in Section B.
- Answer the questions in the spaces provided  
– *there may be more space than you need.*
- Calculators may be used.

## Information

- The total mark for this paper is 90.
- The marks for **each** question are shown in brackets  
– *use this as a guide as to how much time to spend on each question.*

## Advice

- Read each question carefully before you start to answer it.
- Check your answers if you have time at the end.

Turn over ►

P53550A

©2018 Pearson Education Ltd.

1/1/1/1/1/1/1/1/1



Pearson

SECTION A

You must use the Resource Booklet.

Answer ALL questions in this section. Write your answers in the spaces provided.

Some questions must be answered with a cross in a box ☒. If you change your mind about an answer, put a line through the box ☒ and then mark your new answer with a cross ☒.

1 Study Figure 1 in the Resource Booklet.

(a) (i) Identify the year with the largest number of geophysical disasters.

(1)

- A 2000
- B 2004
- C 2010
- D 2016

(ii) Describe the trend in meteorological disasters between 2000 and 2016.

(2)

.....

.....

.....

.....

(iii) Suggest **one** reason for the increase in hydrological disasters, such as flooding, since 2004.

(2)

.....

.....

.....

.....

DO NOT WRITE IN THIS AREA

DO NOT WRITE IN THIS AREA

DO NOT WRITE IN THIS AREA





2 Study Figure 2 in the Resource Booklet.

(a) (i) Name the Milankovitch Cycle labelled X.

(1)

(ii) Explain **two** ways Milankovitch Cycles can change the Earth's climate.

(4)

1

2

(b) Explain how **two** sources of evidence are used to reconstruct past climates.

(4)





3 Study Figure 3 in the Resource Booklet.

(a) (i) Identify the correct statement about the change in the population structure of Chile between 1982 and 2016.

(1)

- A Chile had a greater number of 0-14 year olds in 2016
- B Chile had fewer females over 80 years old in 2016
- C Chile had a greater number of 45-59 year olds in 2016
- D Chile had fewer males over 80 years old in 2016

(ii) Suggest **one** reason for the change in the Chilean population aged over 80.

(2)

.....

.....

.....

.....

(iii) Explain **one** economic consequence of the change in the Chilean population structure between 1982 and 2016, as shown in Figure 3.

(3)

.....

.....

.....

.....

.....

.....









(c) Explain how the management of migration from conflict zones can present challenges for destination countries.

(6)

.....

.....

.....

.....

.....

.....

.....

.....

.....

.....

.....

.....

.....

.....

.....

.....

.....

.....

.....

.....

.....

.....

.....

.....

.....

.....

**(Total for Question 4 = 15 marks)**

---

**TOTAL FOR SECTION A = 60 MARKS**

DO NOT WRITE IN THIS AREA

DO NOT WRITE IN THIS AREA

DO NOT WRITE IN THIS AREA



## SECTION B

**Answer ONE question in this section – EITHER Question 5 OR Question 6.  
Use the evidence provided in the Resource Booklet, your own ideas and examples.**

**If you answer Question 5 put a cross in the box  .**

**5** Study Figure 5 in the Resource Booklet.

(a) Explain why some places in Africa are at greater risk from global warming than others.

(10)

.....  
.....  
.....  
.....  
.....  
.....  
.....  
.....  
.....  
.....  
.....  
.....  
.....  
.....  
.....  
.....  
.....  
.....  
.....  
.....  
.....  
.....  
.....  
.....  
.....

DO NOT WRITE IN THIS AREA

DO NOT WRITE IN THIS AREA

DO NOT WRITE IN THIS AREA



DO NOT WRITE IN THIS AREA

DO NOT WRITE IN THIS AREA

DO NOT WRITE IN THIS AREA

Handwriting practice area with ten horizontal dotted lines.



(b) Assess the extent to which economic costs are the most significant impact of natural disasters.

(20)

Area with horizontal dotted lines for writing the answer.

DO NOT WRITE IN THIS AREA

DO NOT WRITE IN THIS AREA

DO NOT WRITE IN THIS AREA



DO NOT WRITE IN THIS AREA

DO NOT WRITE IN THIS AREA

DO NOT WRITE IN THIS AREA

Handwriting practice area with 20 horizontal dotted lines.



DO NOT WRITE IN THIS AREA

DO NOT WRITE IN THIS AREA

DO NOT WRITE IN THIS AREA

(Total for Question 5 = 30 marks)



DO NOT WRITE IN THIS AREA

DO NOT WRITE IN THIS AREA

DO NOT WRITE IN THIS AREA

If you answer Question 6 put a cross in the box  .

6 Study Figure 6 in the Resource Booklet.

(a) Explain the contribution Special Economic Zones have made to globalisation in countries such as India.

(10)

Handwriting practice lines consisting of 22 horizontal dotted lines for writing the answer to question 6(a).



DO NOT WRITE IN THIS AREA

DO NOT WRITE IN THIS AREA

DO NOT WRITE IN THIS AREA

Blank writing area with horizontal dotted lines.





(b) Assess the extent to which the growth of megacities creates more challenges than opportunities.

(20)

DO NOT WRITE IN THIS AREA

DO NOT WRITE IN THIS AREA

DO NOT WRITE IN THIS AREA

Area with horizontal dotted lines for writing.



P 5 3 5 5 0 A 0 1 7 2 0

DO NOT WRITE IN THIS AREA

DO NOT WRITE IN THIS AREA

DO NOT WRITE IN THIS AREA

Handwriting practice area with 20 horizontal dotted lines.



DO NOT WRITE IN THIS AREA

DO NOT WRITE IN THIS AREA

DO NOT WRITE IN THIS AREA

Area with horizontal dotted lines for writing.

**(Total for Question 6 = 30 marks)**

**TOTAL FOR SECTION B = 30 MARKS**  
**TOTAL FOR PAPER = 90 MARKS**



DO NOT WRITE IN THIS AREA

DO NOT WRITE IN THIS AREA

DO NOT WRITE IN THIS AREA

**BLANK PAGE**



**Pearson Edexcel**  
International Advanced Level

# Geography

**International Advanced Subsidiary  
Paper 1: Global Challenges**

Tuesday 15 May 2018 – Afternoon  
**Resource Booklet**

Paper Reference

**WGE01/01**

**Do not return this Resource Booklet with the question paper.**

Turn over ►

P53550A

©2018 Pearson Education Ltd.

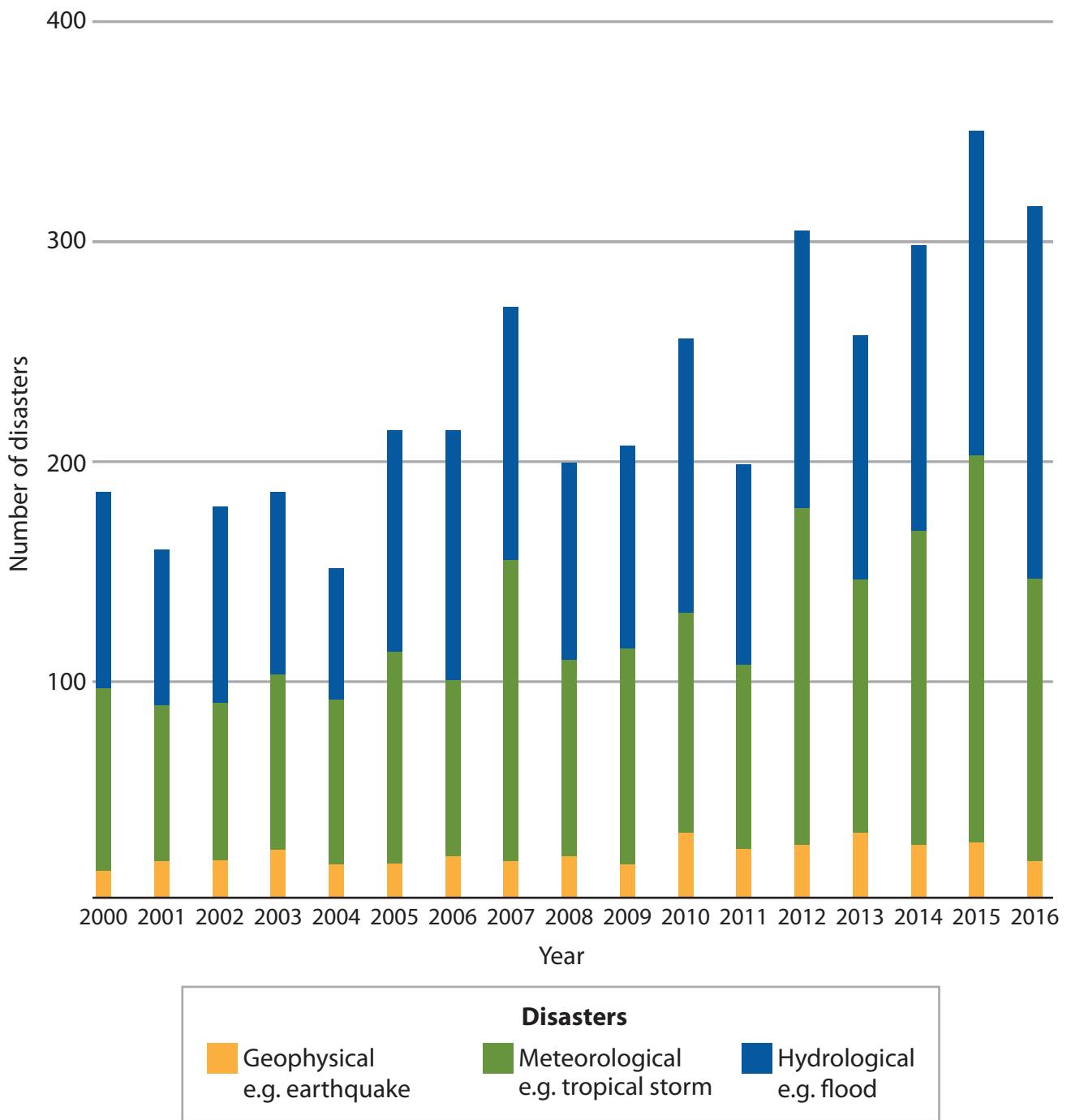
1/1/1/1/1/1/1/1



Pearson

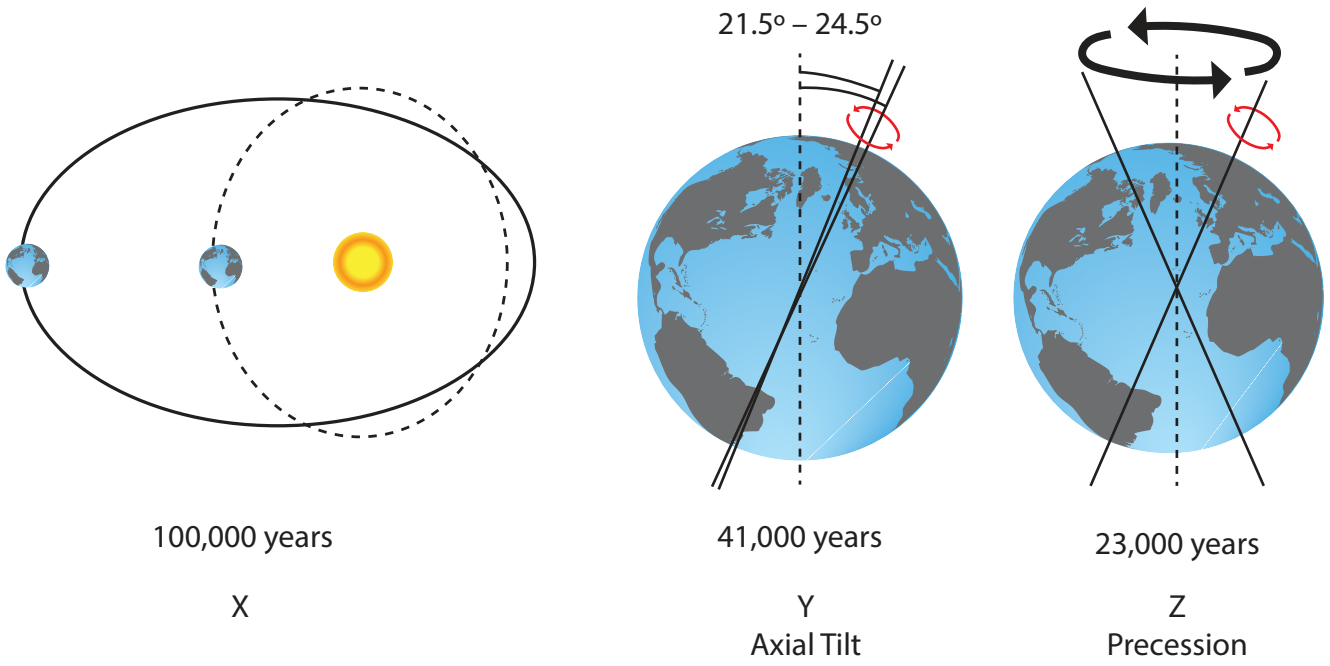
SECTION A

The following resource relates to Question 1.



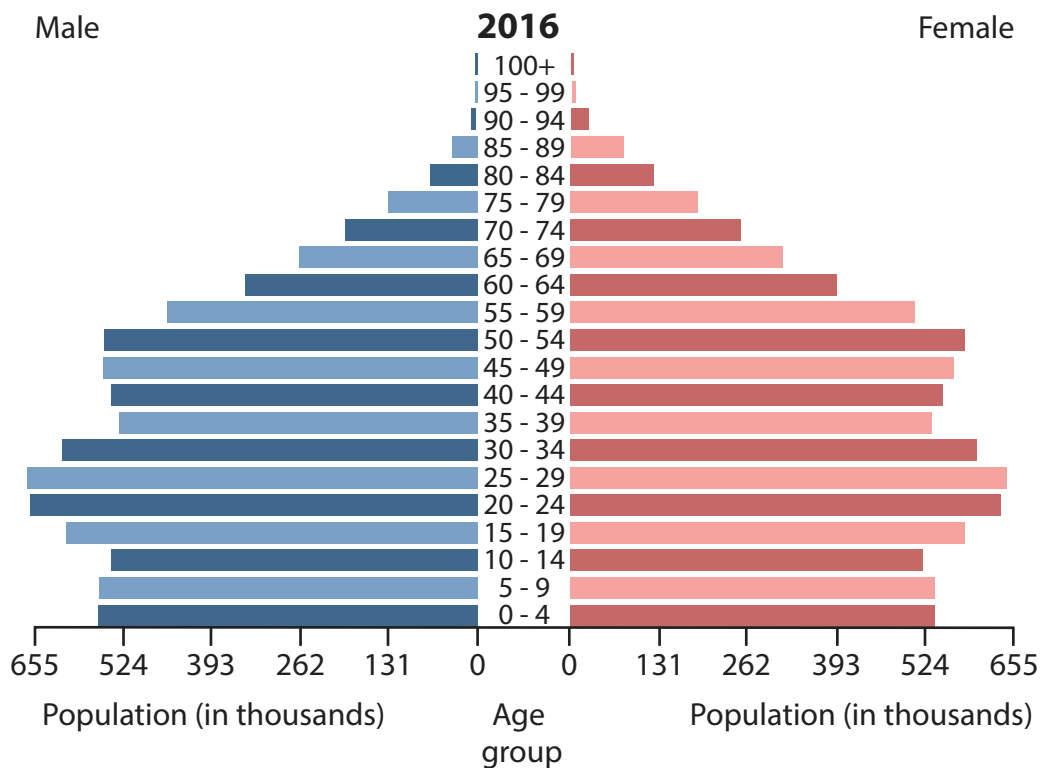
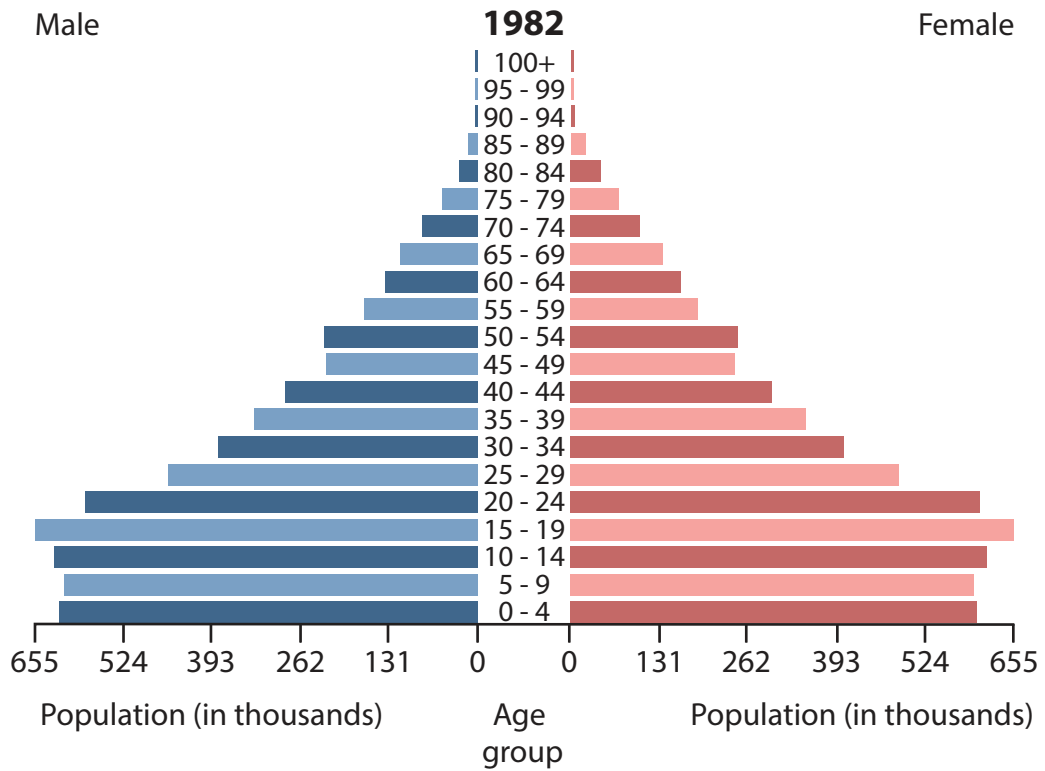
**Figure 1**  
**Number of disasters worldwide 2000-2016**

The following resource relates to Question 2.



**Figure 2**  
**The Milankovitch Cycles**

The following resource relates to Question 3.



**Figure 3**  
**Population pyramids for Chile in 1982 and 2016**



The following resource relates to Question 4.

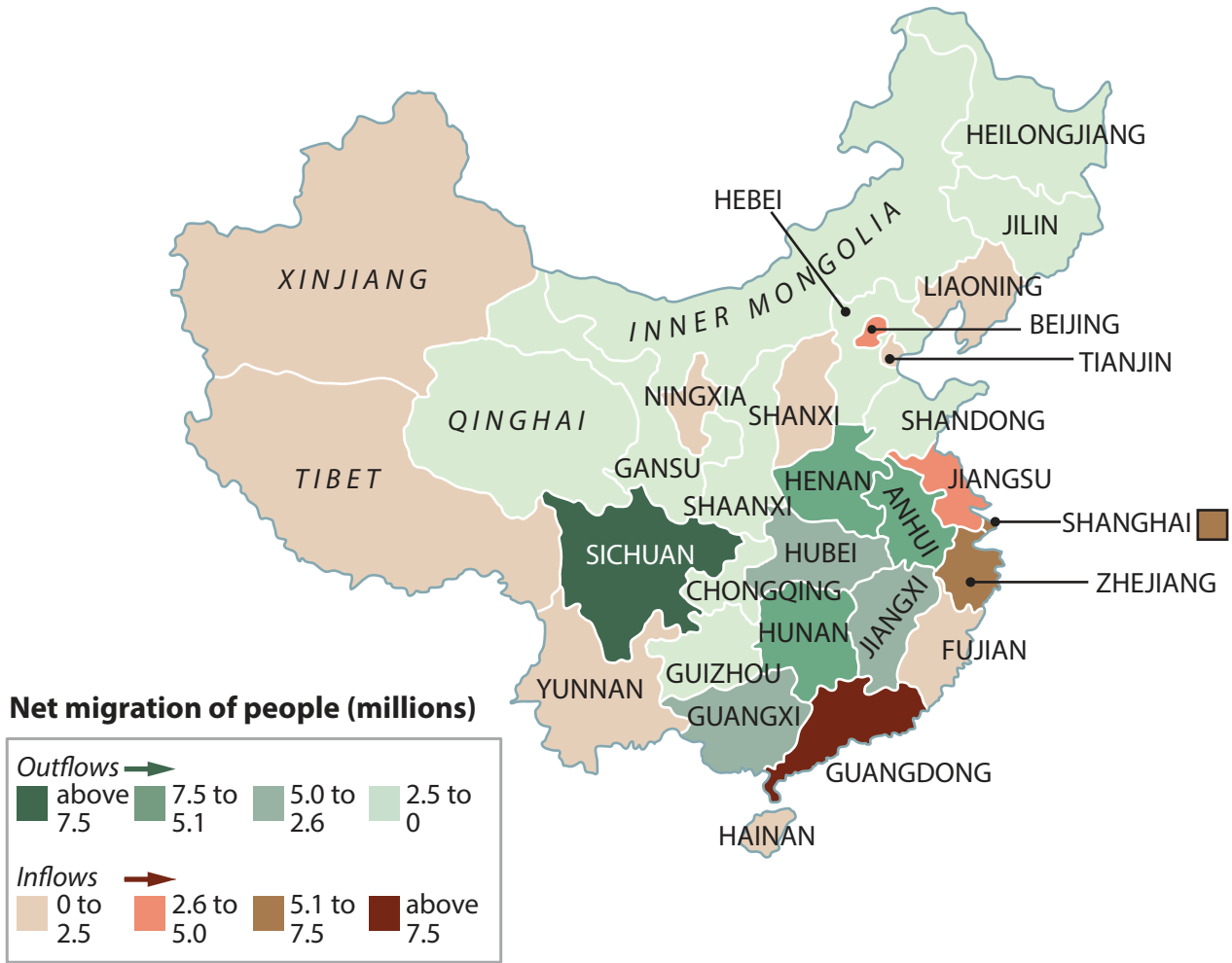
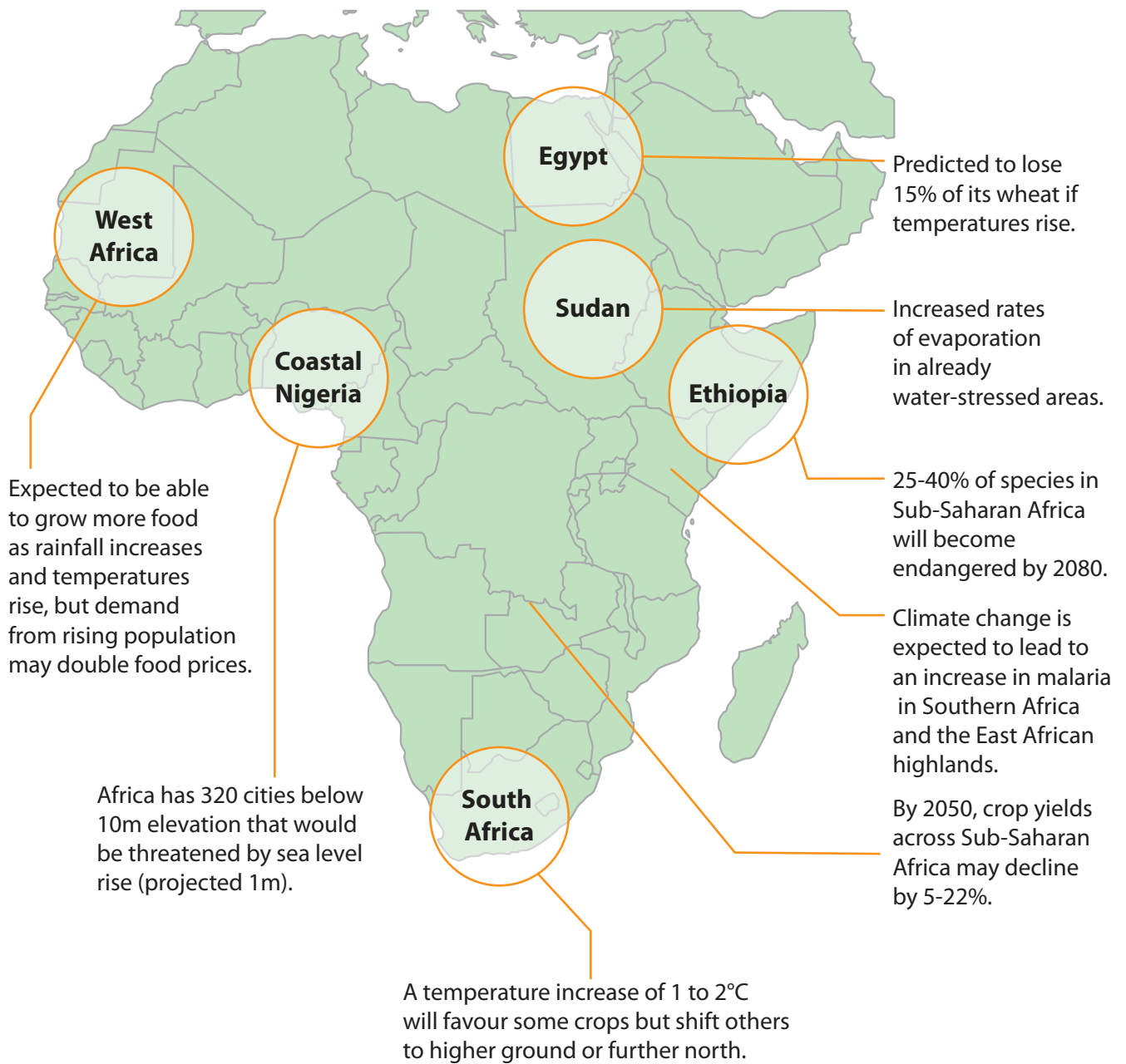


Figure 4

Net internal migration between Chinese provinces from 1990 to 2005

**SECTION B**

The following resource relates to question 5.



**Figure 5**

**Possible impacts of climate change on Africa if temperatures rise by 2°C**

The following resource is for Question 6.

## Key facts about SEZs in India

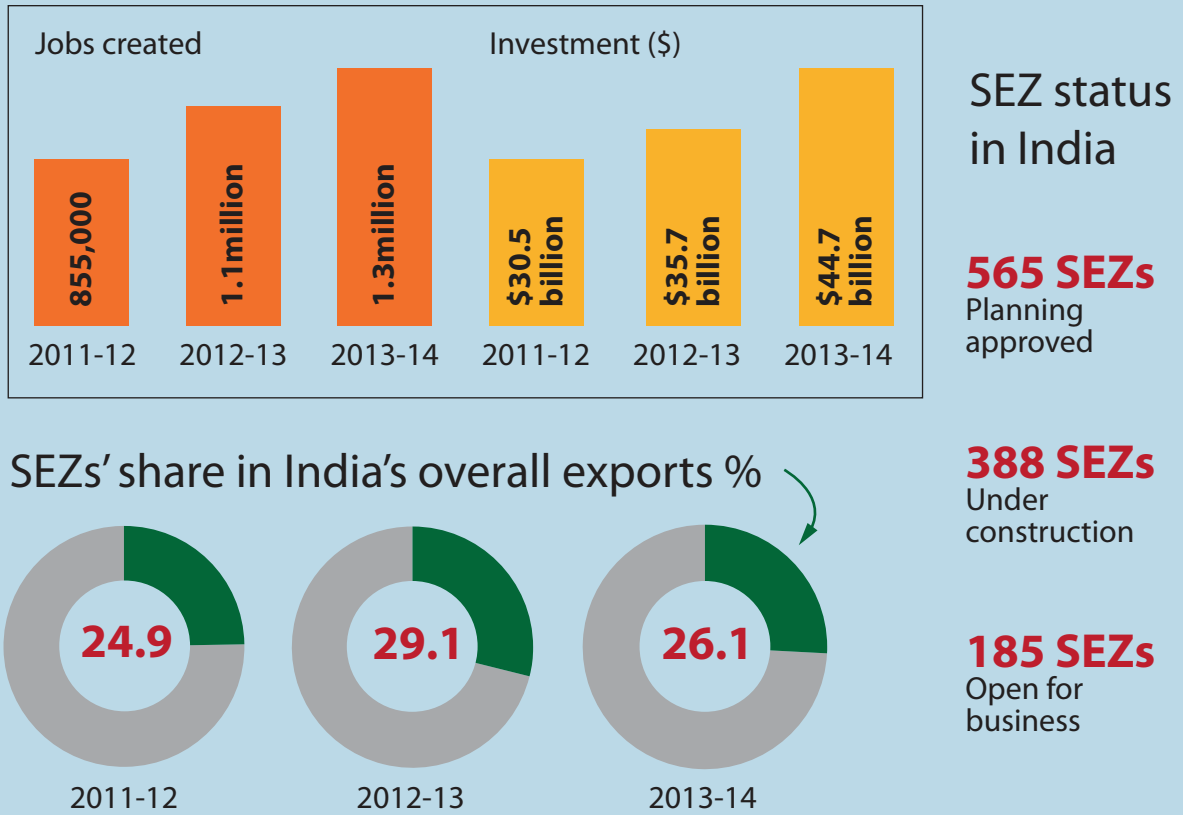


Figure 6

### Key facts about Special Economic Zones (SEZs) in India

**BLANK PAGE**

Figure 2 – Source from: <http://www.earthmagazine.org/sites/earthmagazine.org/files/2016-04/Milankovitch.png>

Figure 3 – Source from: <https://populationpyramid.net/chile/1960/>

Figure 5 – © Guardian News and Media Services

Every effort has been made to contact copyright holders to obtain their permission for the use of copyright material. Pearson Education Ltd. will, if notified, be happy to rectify any errors or omissions and include any such rectifications in future editions.